


Children - Computer Safety Rules



I promise that :




- I will show respect and kindness to all my friends and teachers during my video lessons.



- I will 'mute' my microphone when I come on screen.



- I will ask my adult to wave at the camera during the register.



- I will press the 'hands up' icon if I have a question to ask.



- I will 'unmute' when my teacher asks me to share my ideas.



- I will try my best to concentrate on the screen for the whole session.



- I know that all my video lessons are recorded by the teacher.



- I will not take screen shots or photos of the screen.


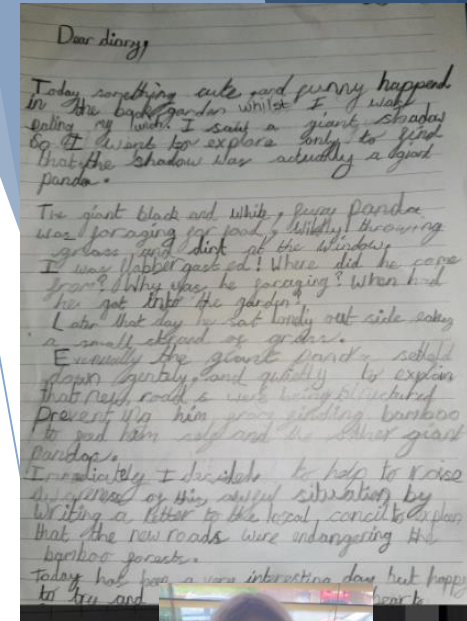
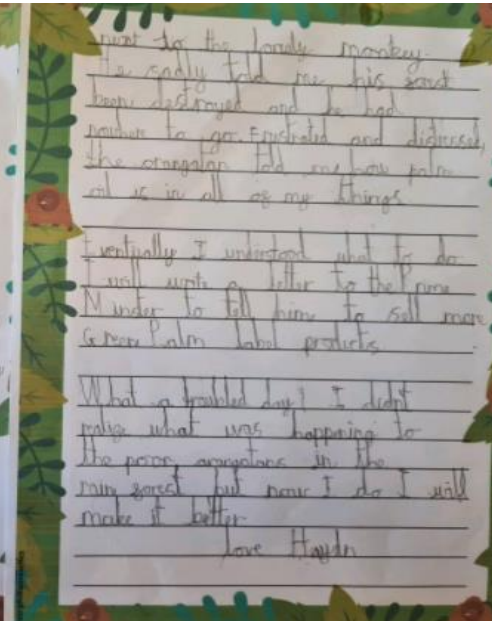
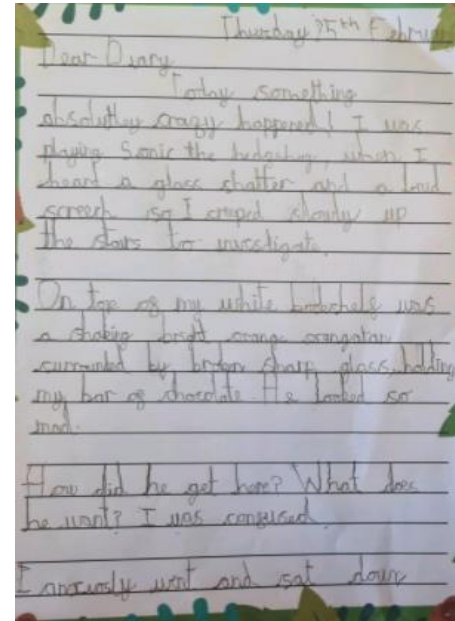
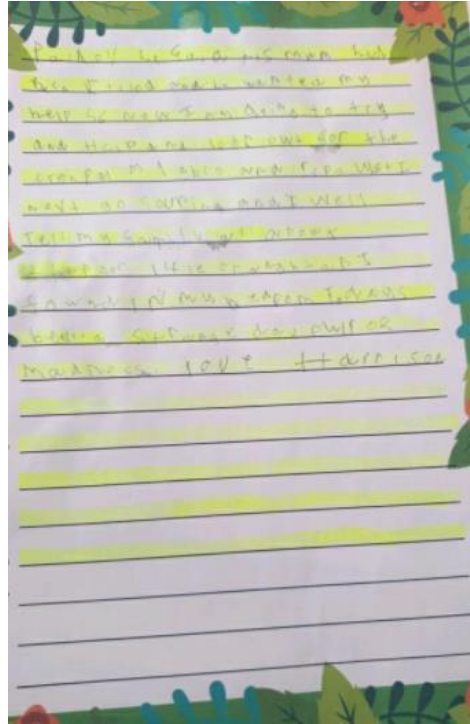
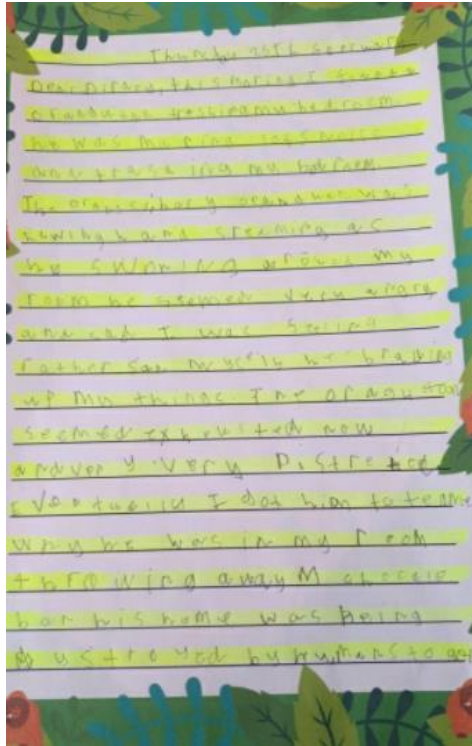


Y4 Class Meeting

26.2.21

What have we been doing this week?

English



A Fact File About White Rhinos

Introduction

White rhinos are the second largest land mammal.

Appearance

Rhinos are especially known for their huge horn on the very edge of their nose.

- They have very wrinkly and sensitive skin.
- The colour of their skin is light grey.

Diet






- White Rhinos are herbivores.
- They use their lips to pluck leaves and fruit from the branches of the trees and bushes.
- They also like to eat shorter and fresh growth of grass.


Habitats

- White rhinos live in the s Kenya, Namibia, and Zimbabwe, though the vast majority are found in South Africa.
- White Rhinos live in the grasslands and sometimes eat short grass and fresh growth.

Interesting Facts

- There are five species of rhino.
- The largest of the five species is the white rhino.





Game 1	Game 2	Game 3
63 21 42 70 14	7 77 42 21 56	14 70 49 35 7
14 56 56 84 35	63 35 7 70 14	28 56 21 77 42
21 35 49 77 7	28 49 56 42 84	84 42 56 14 63
63 84 7 28 35	56 28 21 63 7	49 77 35 70 28
42 49 84 77 42	42 35 84 28 49	7 28 49 84 21
14 63 70 63 21	14 84 56 70 77	63 56 14 56 77
70 49 56 77 35	63 14 77 63 28	84 42 28 63 49
14 28 56 28 49	21 70 49 7 35	21 70 35 56 7

A game for 2 players. There are three game boards but the game is the same. Throw a 3-12 dice. This will be one of the factors. The other factor for this game is 7. Find the product of the 2 numbers. Cover the product in the grid with a counter or shade with a coloured pencil. First player to 4 in a row is the winner.

Maths



Remember to upload your answers to Class Dojo!

222	259	243
258	252	203
272	266	234

Odd One Out
Prove which calculation doesn't appear in the answer grid

1	38×7
2	27×9
3	43×6
4	39×6
5	28×9
6	37×6
7	29×7
8	34×8

Challenge:

1) A farmer is calculating the number of sheep on her farm. She has 6 fields. Each field has 35 sheep. Use a written method to work out how many sheep there are altogether.

2) 34×5 can be represented like this



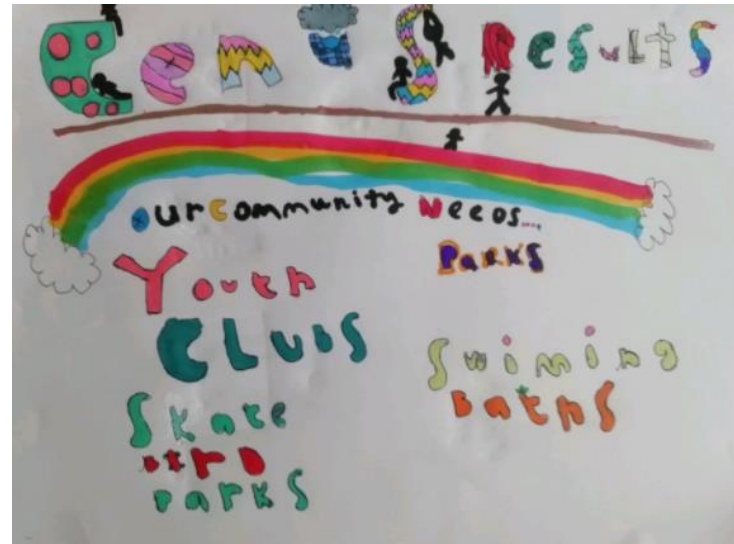
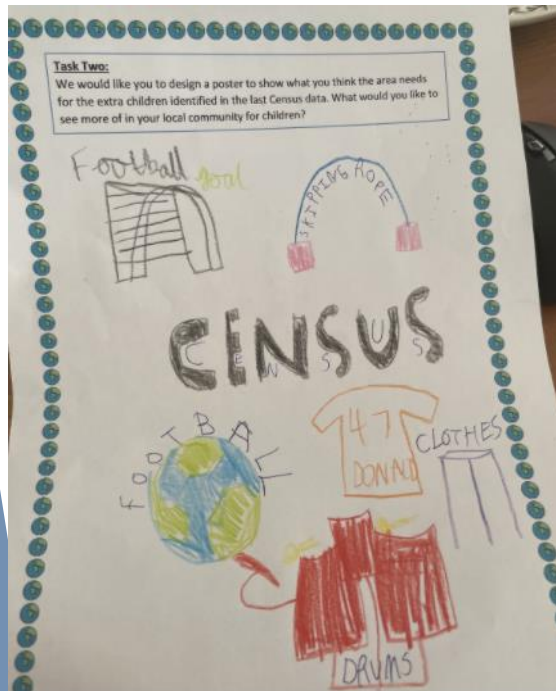
Remember to upload your answers to Class Dojo!

222	259	243
258	252	203
272	266	234

Odd One Out

1	38×7
2	27×9
3	43×6
4	39×6
5	28×9
6	37×6
7	29×7
8	34×8

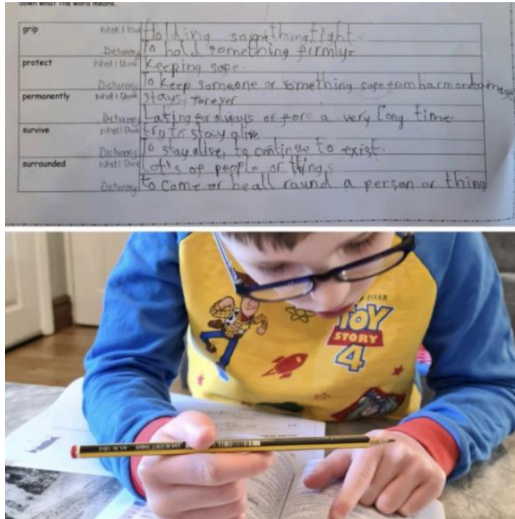
Science!



Stars of the Day this week!

Phoebe
Ruby
Hugo

Monday



Lilly Par
Nick
Keira

Tuesday

Martin
Antonia
Harrison

Wednesday

Mia
Haydn
Isla

Thursday

?

Friday





All of our 'Stars of The Day' Winners this week, your 5 Dojos will go on after this meeting!

At Home: Poppy
At Home: Sophia
In School: Lilly Preston
M

More Winners!

Well Done to:

Alexia

Lilly Parker

Lilly P Molyneux



Jenson
Leonie
Mia
Nick



Class Dojo

Congratulations!

This is to certify that

has earned 100 dojo points and as such has reached

Silver Level

Signed: _____ **(Class Teacher)**

Haydn

Adam

Alfie

Jessika

Class Dojo

Congratulations!

This is to certify that
has earned 150 dojo points and as such has reached
Gold Level

Value: This week's medal winners!



Our medal winners this week:

Lexi

Jessika

Any questions?

