



I can combine amounts to make a particular value


5a. True or false? The amount of money circled below is 36p.



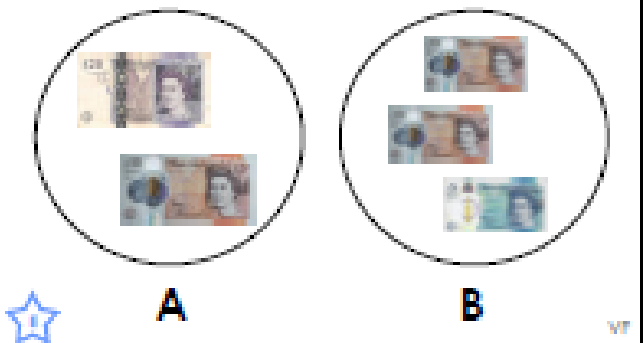
5b. True or false? The amount of money circled below is 49p.



6a. Which circle contains 50p?



6b. Which circle contains £25?



7a. Select the missing amount of money.

$$£20 \text{ and } 60\text{p} = £10 + \square + 50\text{p} + 10\text{p}$$

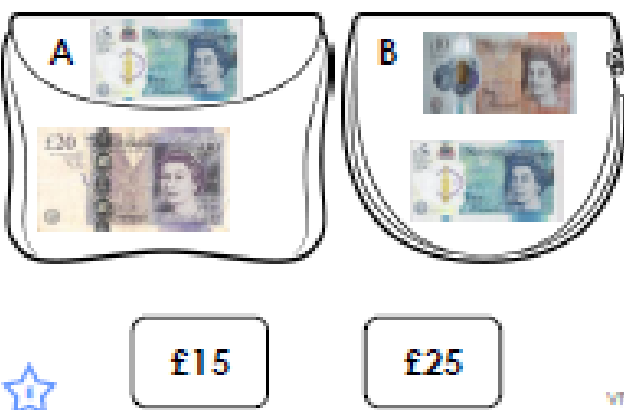


7b. Select the missing amount of money.

$$£3 \text{ and } 45\text{p} = £2 + \square + 20\text{p} + 20\text{p} + 5\text{p}$$



8a. Match the purses to the correct amount of money.



8b. Match the purses to the correct amount of money.

