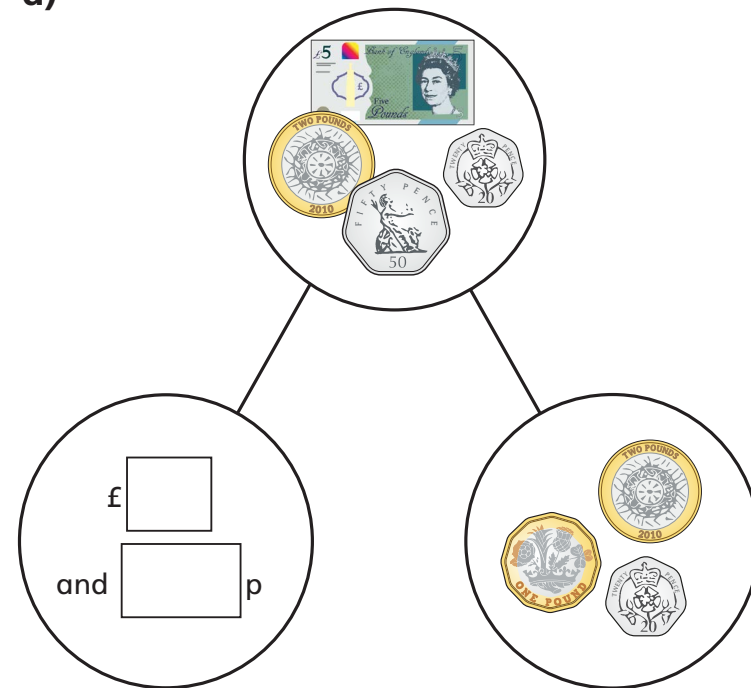


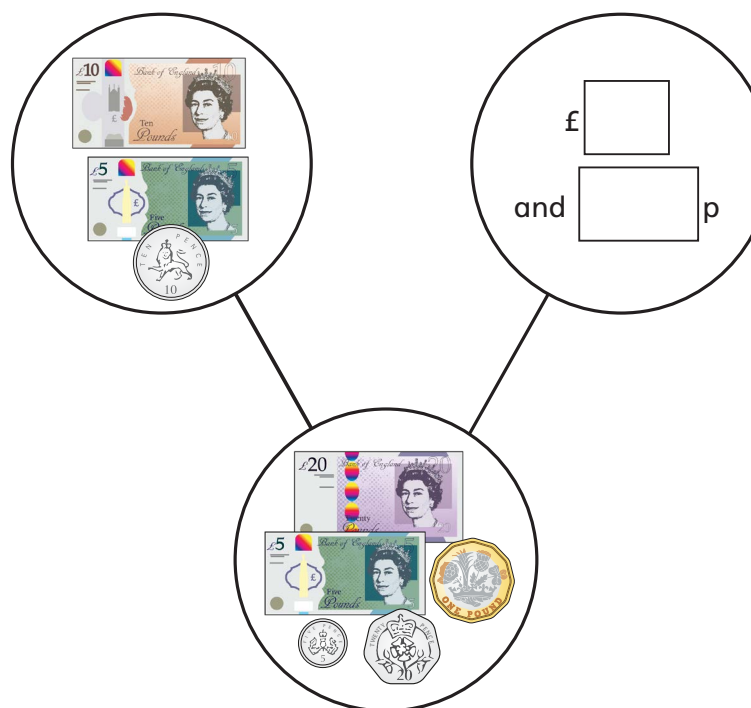
# Subtract money

1 Complete the part-whole models.

a)



b)



2 Tommy has £5 and 75p in his pocket.



He puts £2 and 50p in his money box.

How much is left in his pocket?

£  and  p

3 Whitney has £4 and 80p.

She buys this pair of socks.

How much money does Whitney have left?



£  and  p

4 Complete the statements.

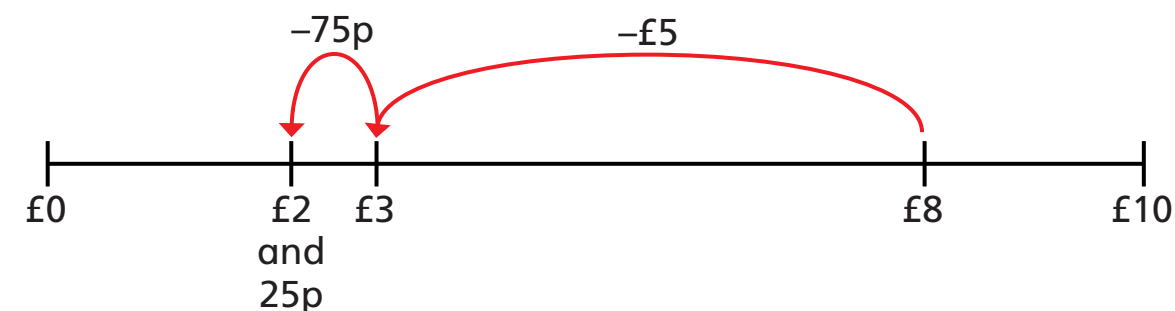
a) £8 and 65p – £5 and 25p = £  and  p

b) £8 and 65p – £5 and 65p = £  and  p

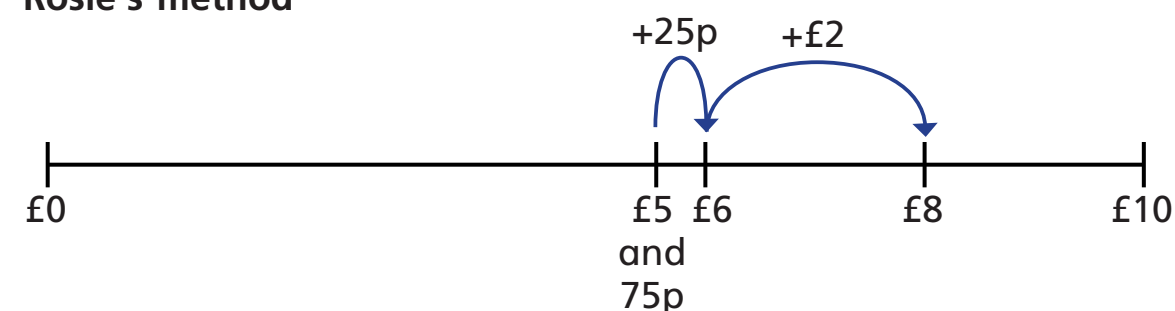
c) £8 and 65p – £8 and 30p = £  and  p

5 Amir and Rosie use a number line to subtract £5 and 75p from £8

**Amir's method**



**Rosie's method**



Amir and Rosie both get £2 and 25p as their answer.

a) Whose method do you prefer? \_\_\_\_\_

b) Explain why.

---



---

6 Complete the number sentences.

a) £3 and 50p – £1 and 20p = £  and  p

b) £3 – £1 and 50p = £  and  p

c) £6 and 80p – £2 and 25p = £  and  p

d) £8 and 70p – £3 and 54p = £  and  p

7 Complete the bar models.

