

Challenge Activity

I can recognise unit and non-unit fractions.

4.3.21

Use the given clues to find which fraction is the odd one out.



Tom

I have a unit fraction.



Tara

My fraction is four quarters.



Sam

I have two parts shaded.



$\frac{3}{4}$ $\frac{1}{3}$ $\frac{4}{4}$ $\frac{2}{4}$

PS

Use the given clues to find which fraction is the odd one out.



Isra

I have two parts shaded.



Noah

I have one of the four parts shaded.



Kara

My fraction is one whole.


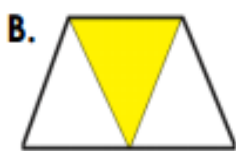


$\frac{3}{3}$ $\frac{1}{4}$ $\frac{3}{4}$ $\frac{2}{3}$

I

Sort the fractions using the table below.

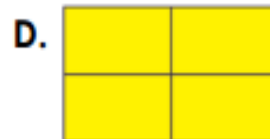
Non-Unit fractions	Unit fractions



VF

Sort the fractions using the table below.

Non-Unit fractions	Unit fractions



VF