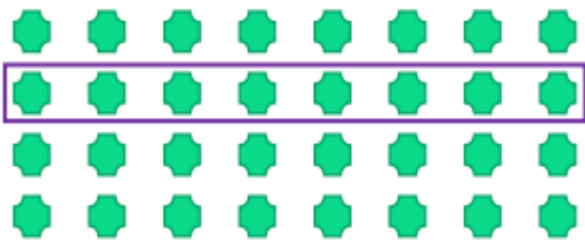


Challenge activity

3.3.21

I can identify unit fractions – $\frac{1}{2}$, $\frac{1}{4}$ and $\frac{1}{3}$

Use the picture to fill in the fraction.




$$\frac{1}{\boxed{}} \text{ of } 32 = 8$$

Use the picture to fill in the fraction.



$$\frac{1}{\boxed{}} \text{ of } 16 = 8$$

Use the picture to fill in the gaps.




$$\frac{1}{2} \text{ of } 22 = 22 \div \boxed{} = \boxed{}$$

Use the picture to fill in the gaps.



$$\frac{1}{3} \text{ of } 21 = 21 \div \boxed{} = \boxed{}$$

Use the picture to help you fill in the table



	Number of groups	Number in each group
$\frac{1}{3}$ of 12		
$\frac{1}{4}$ of 12		