

I can recognise, find and name a quarter as 1 of 4 equal parts of an object, shape or quantity


Introducing Fractions of Amounts

Finding Quarter

Find a quarter of these amounts. Use counters or buttons to help, or draw circles around the pictures to find the answer. The first one has been done for you.

Quarter of **8** is **2**


8 sweets



$\frac{1}{4}$ of **8** = **2**

Quarter of is


kites



$\frac{1}{4}$ of =

Quarter of is

cats



$\frac{1}{4}$ of =

Now try these:

Draw 4 stars then find a quarter.

Draw 16 flowers then find a quarter.

$\frac{1}{4}$ of **4** = Quarter of **4** is

$\frac{1}{4}$ of **16** = Quarter of **16** is

Finding Quarter

Draw 8 stars then find a quarter.

Draw 12 flowers then find a quarter.

$$\frac{1}{4} \text{ of } 8 = \square$$

$$\frac{1}{4} \text{ of } 12 = \square$$

Complete these number sentences.

Quarter of **4** is

$$\frac{1}{4} \text{ of } 28 = \square$$

Quarter of **36** is

$$\frac{1}{4} \text{ of } 20 = \square$$

Quarter of **24** is

$$\frac{1}{4} \text{ of } 32 = \square$$